

PROCEDURAL

5EP16

First name _____

Last name _____

School _____

Class _____

Date of birth ○○ ○○ ○○○○

Date of test ○○ 05 2016

Total score (maximum 35)



139104



Llywodraeth Cymru
Welsh Government

1

$$425 + \boxed{} = 500$$

$$425 - \boxed{} = 395$$



2

Write in order.

1.25

1.2

1.02

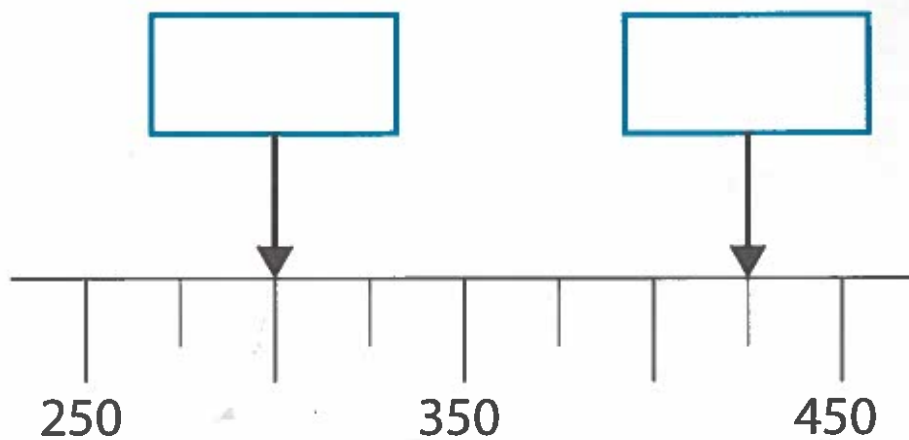
1.5

smallest

largest


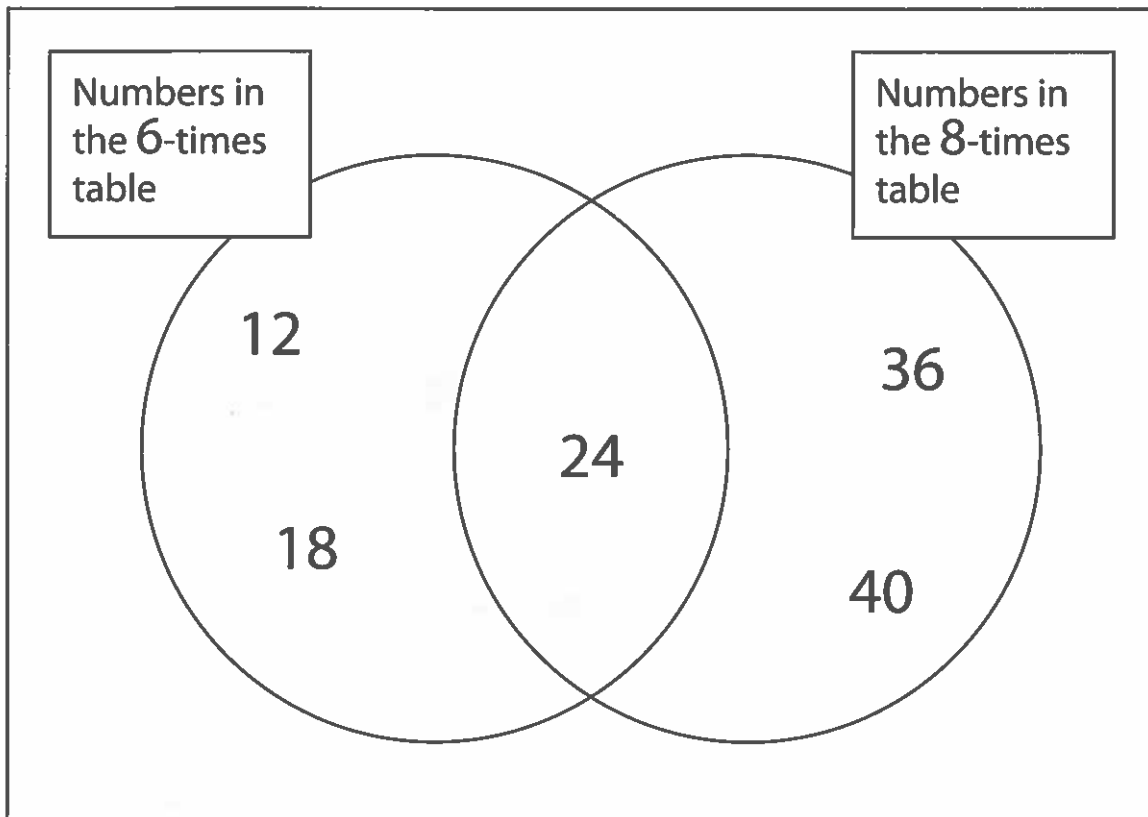
3

What numbers are the arrows pointing to?



4 Which number is in the **wrong** place on the Venn diagram?

Circle your answer.



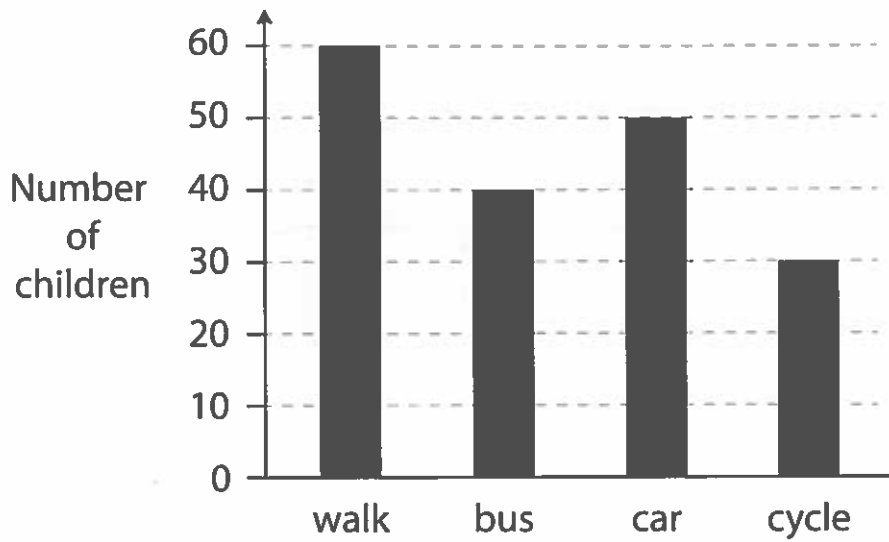
5

$$\frac{1}{2} \text{ kilogram} = \boxed{} \text{ grams}$$



6

How children travel to school



How many **more** children travel by **car** than **cycle**?

more



What **fraction** of the children walk to school?

Circle your answer.

$\frac{1}{4}$

$\frac{1}{2}$

$\frac{2}{3}$


$\frac{1}{3}$

$\frac{1}{6}$




7

$$100 \div 5 = \boxed{} \times 10$$



8



**2 tins of beans
for £1.25**

Mrs Patel buys 6 tins of beans.

How much does she pay?

£



She pays with a £20 note.

How much change should she get?

£



9

Double 25 = Half of



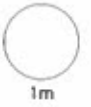
10



The temperature in Swansea is 3°C .

In Corwen it is 7°C colder.


What is the temperature in Corwen?

 $^{\circ}\text{C}$ 

11 A trip for 10 people costs £456

They share the cost equally.

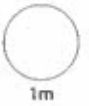

What is the cost for each person?

 £


12

$$823 + 598 = \boxed{}$$

$$823 - 598 = \boxed{}$$



13

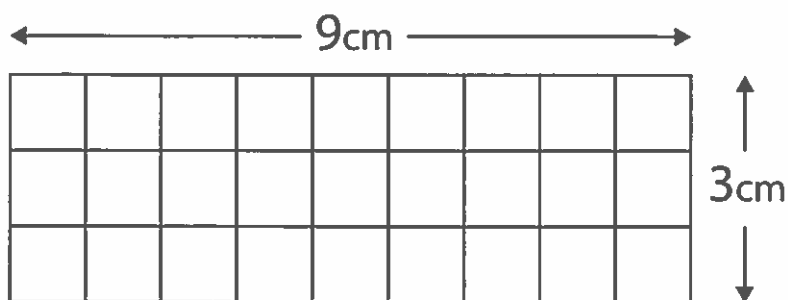
	From: Rosslare (Ireland)
Ferry	To: Pembroke (Wales)

The ferry leaves at 15 : 30 and takes 3 hours and 55 minutes.

What time does it arrive at Pembroke?

A rounded rectangular box containing a colon (:), intended for the student to write the arrival time.

14



What is the **perimeter** of this rectangle?

cm



What is the **area** of the rectangle?

cm²



15 Fill in the gaps in the table.

Fraction		Decimal
$\frac{1}{4}$	=	<input type="text"/>
<input type="text"/>	=	0.3



16

$$258 \div 6 = \boxed{}$$



Write a calculation to check your answer.

$$\boxed{} \times \boxed{} = \boxed{}$$



17

$$1250 \text{ millilitres} = \boxed{} \text{ litres}$$





18

There are 72 children in a school.

$\frac{5}{8}$ of the children are boys.

How many boys are in the school?







19 Write the number that is 100 less than 100 000



1m

20 Find the difference between 15.5 and 13.8



1m

21 8 bars of chocolate cost £7.20

How much do 12 bars cost?



2m

22

$$\div 100 = 13.7$$

$$\times 100 = 25$$



1m




1m

23

Scores in a test	
Ben	13
Nor	6
Ifan	14
Bryn	9
Sian	8

What is the **mean** score?




2m



TOTAL

8m